

Assignment 7 Date: 9/11/21 Subject: Mathematics

Class :2

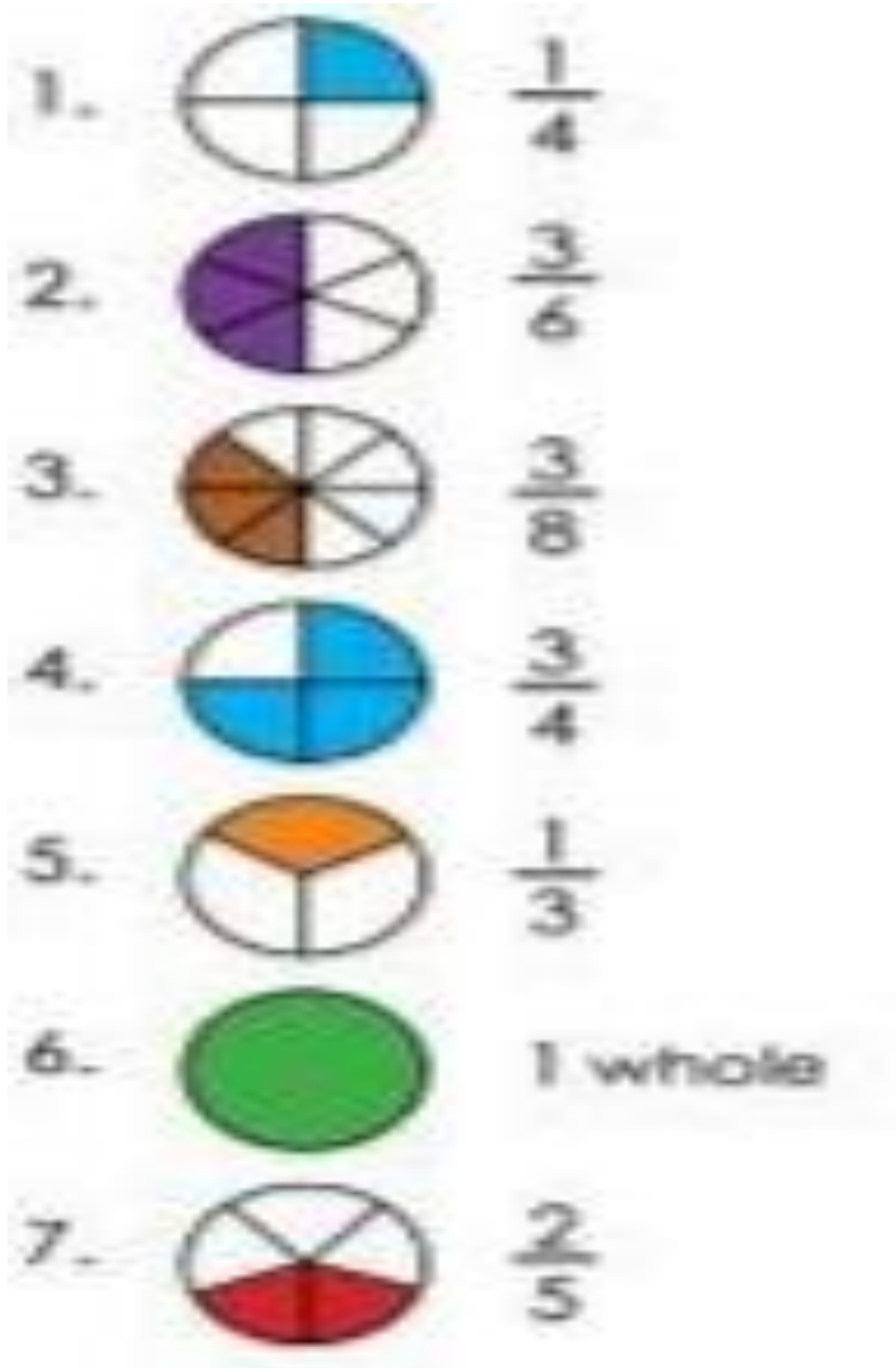
Teacher: Kalpana Bawa

## Lesson 3 Fractions

### POINTS TO REMEMBER:

- 1) A complete or full object is called **whole**.
- 2) Fractions are equal parts of **a whole**.
- 3) When a whole is divided into two equal parts. Each part is called **half**. **Half is written as  $1/2$** .
- 4) When a whole is divided into three equal parts, Each part is called **one-third**. **One-third is written as  $1/3$** .
- 5) When whole is divided into Four equal parts. Each part is called **One-Fourth OR quarter**. **It is written as  $1/4$** .
- 6) 3 parts out of 4 equal parts of a whole are called **three -- fourth OR 3 quarters**. **It is written as  $3/4$**  .

Q1: Whole and Fractions:



Q2:

Write the fraction of the shape that is filled in.


$$\frac{\boxed{1}}{\boxed{\quad}}$$

$$\frac{\boxed{\quad}}{\boxed{\quad}}$$

$$\frac{\boxed{\quad}}{\boxed{6}}$$

$$\frac{\boxed{\quad}}{\boxed{\quad}}$$

$$\frac{\boxed{\quad}}{\boxed{\quad}}$$

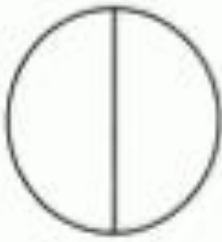
$$\frac{\boxed{\quad}}{\boxed{\quad}}$$

$$\frac{\boxed{\quad}}{\boxed{\quad}}$$

$$\frac{\boxed{\quad}}{\boxed{\quad}}$$

Q3:

Color in the fraction shown of each shape.



$\frac{1}{2}$



$\frac{2}{4}$



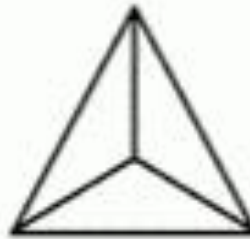
$\frac{1}{2}$



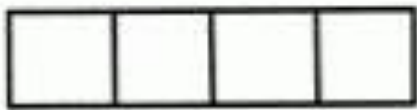
$\frac{3}{8}$



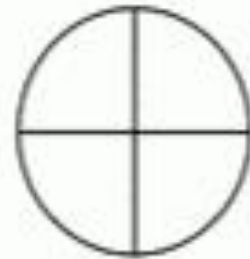
$\frac{1}{4}$



$\frac{1}{3}$



$\frac{2}{4}$



$\frac{3}{4}$

### Homework

Do pg 113 , 115 and 116 in the book.

